

Name: _____

DAY
121

1 What are three things you notice about the sentence below?

If you hadn't broiled the oatmeal, it wouldn't have burned!

Answers will vary, but may include ideas such as: starts with a capital, ends with an exclamation, compound word, past tense verbs, contractions, pronouns etc.



2 Circle the correct spelling for each picture.



spoil

spool

spoyl



boyl

boil

boile

spoil

boil

3

coil


to wind around
in circles

(verb)

The snake **coiled** up
in the sunshine.

What is the snake doing?

**It is wound around
in circles.**



4


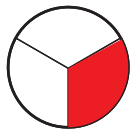

wait

w a i t

w a i t

w a i t

5 Shade a third of each shape.



Other answers are
possible.

6

141

1 hundred 4 tens 1 one
100 + 40 + 1

306

3 hundreds 0 tens 6 ones
300 + 0 + 6

7 Write 2 things you notice
about this pictograph.

Slices of Watermelon Eaten

Alexis



David



Moira



KEY:

= 1 slice

8

The boy has 45 coins. He earns 23 more.

How coins does he have now?

68 coins 45 + 23 = 68

How many more does he need to earn to have 75 coins?

7 more 68 + 7 = 75



**answers
will vary**

Name: _____

DAY
122

1 Circle the 2 contractions in each sentence.

If you hadn't broiled the oatmeal, it wouldn't have burned!
The baby won't fall asleep if you don't use a softer voice.

A contraction combines 2 words with an apostrophe to replace the missing letters.

2 Sort the words by their spelling pattern.

coin

enjoy

point

cowboy

-oi

coin
point

-oy

enjoy
cowboy

3

coil

to wind around
in circles
(verb)



What does **coil** have
to do with a long scarf?

ANSWERS WILL VARY
[It will need to be coiled
around your neck.]

4 Use context clues to find the
meaning of the underlined word.

Your hands are very
dirty after digging in
the soil!

Soil means _____.

☐ river

☒ dirt

5 Write combinations of 14.

14	
8	6

$$14 - \underline{8} = 6$$

$$8 + \underline{6} = 14$$

$$\underline{14} - 6 = 8$$

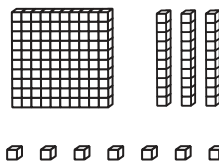
14	
4	10

$$\underline{10} + 4 = 14$$

$$14 - \underline{4} = 10$$


$$4 + 10 = \underline{14}$$

6 Write the number shown by
the blocks.



hundreds	tens	ones	
1	3	7	= 137

7 Count by 5 to tell how many
minutes have passed.



20 minutes have passed
since the hour started.


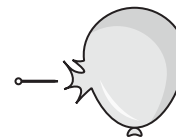
8

There were 33 balloons.

13 of them popped.

How many balloons are left?

20 balloons are left
33 - 13 = 20



5 or 05 minutes have passed
since the hour started.

Name: _____

DAY
123

1 Complete each sentence using a contraction with not.

CONTRACTIONS

didn't couldn't
wouldn't won't
can't shouldn't

She _____ say that.
ANSWERS WILL VARY
He _____ come here.


2 Write the word that matches each picture.

foil

soil

coil

boil



coil

foil

3

coil

to wind around
in circles
(verb)



I **coiled** up the long...

ANSWERS WILL VARY

**[cord, rope, hose,
hair, scarf, etc.]**

4

them

t h e m

t h e m

t h e m

5 Add.

$3 + 3 = \underline{6}$

$3 + 2 = \underline{5}$

$4 + 4 = \underline{8}$

$4 + 3 = \underline{7}$

$8 + 8 = \underline{16}$

$7 + 8 = \underline{15}$

What do you notice?

ANSWERS WILL VARY
[If you know the doubles, the doubles -1
is easy to figure out.]

6 Write the numeral.

7 hundreds
0 tens
2 ones

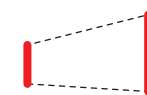
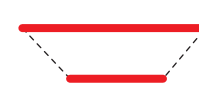
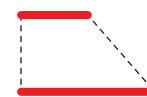
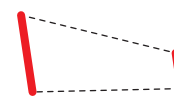
702

3 hundreds
3 tens
5 ones

335

7 Trace the parallel sides on each trapezoid.

EXAMPLE:



Parallel sides are always the same
distance apart.

8

Troy scored 39 points in the basketball game. Chad scored 21 points.
How many more points did Troy score than Chad?

18 more points
39 - 21 = 18



Name: _____

DAY
124

1 Rewrite the sentence correctly.

mom doesnt like us to boyl water

**Mom doesn't like us to
boil water. (or !)**

2 Circle & write the word that has the same vowel sound as the picture.



boss
fold
from

boss



owl
boy
old

boy

3

coil

to wind around
in circles
(verb)



What would you do if you saw
a **coiled** snake?

ANSWERS WILL VARY

4

(mid-)

"near the middle of"

midwinter

prefix

base word

mid

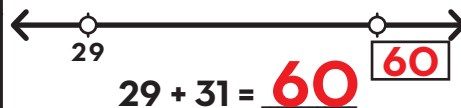
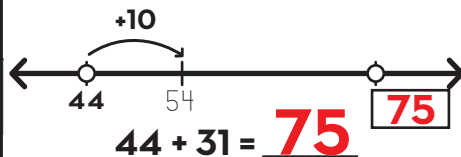
winter

definition

**near the middle of
winter**

5

Make jumps of tens and ones
to add 31.



6

Use symbols to compare the
numbers.

92 > 89

16 < 61

> is greater than < is less than = is equal to

7

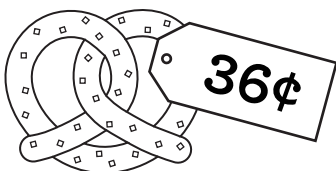
One child has 20 teeth.
**If there are 3 children, how
many teeth are there?**

60 teeth

**3 groups of
20 is 60.**

8

Draw the coins needed to pay for the item.



ANSWERS WILL VARY



Name: _____

DAY
125

1 Write about something you shouldn't do. Circle the contraction.

ANSWERS WILL VARY

2 Draw lines to match the words with the correct pronoun.

you	we	she	I
●	●	●	●
●	●	●	●
ourselves	myself	yourself	herself

A pronoun is a word used in place of a noun.

3 Draw a line to connect each word to the correct meaning.

bold	mellow	croon
calm and relaxed; not loud or irritating	brave and confident	to use a soft, low voice

4 **watch**

w	a	t	c	h
w	a	t	c	h
w	a	t	c	h

5 Solve.

$$\begin{array}{l} 78 + 20 = 98 \\ 39 + 4 = 43 \\ 20 + 30 = 50 \\ 18 - 10 = 8 \end{array}$$

6 Write the missing numbers.




7 Moises baked 20 sugar cookies and 14 chocolate chip cookies. Roy baked 12 sugar cookies. **How many chocolate chip cookies does he need to bake to have the same number of cookies as Moira?**

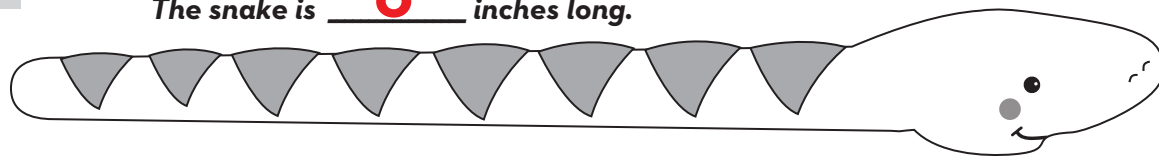
22 cookies

Moises: $20 + 14 = 34$

Roy: $12 + 22 = 34$



8 The snake is **6** inches long.



Name: _____

DAY
126

1 What are three things you notice about the sentence below?

It's careless to leave Blair's baseball where I'll trip on it!

Answers will vary, but may include ideas such as: it starts with a capital, it's an exclamation, adjective, possessive noun, contractions, verb, compound word, etc.




2 Circle the correct spelling for each picture.



stair steer **stare** **share** shair shear

stare



share

3

glare


to look at someone
in an angry way

(verb)

Mom **glared** at Aizen
when she found the gum
he stuck to the chair.

How did Mom look at Aizen?

**She looked at him
in an angry way.**



4

never

n e v e r

n e v e r

n e v e r

5

There are 4 kids. Each one
needs half a paper for an art
project.

How many whole papers do
they need?

2 whole papers



6

711

7 hundreds **1** ten **1** one
700 + 10 + 1

925

9 hundreds **2** tens **5** ones
900 + 20 + 5

7

Use the pictograph to answer
the questions.


Slices of Watermelon Eaten

Alexis     

David    

Moira   

KEY:

 = 1 slice

Alexis ate the most slices
of watermelon.

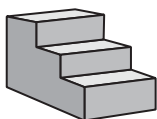
4 slices of watermelon
were eaten by **David**.

8

I climbed 60 stairs, but I have 36 more to go to reach the top.

How stairs are there in all?

96 stairs
60 + 36 = 96



Name: _____

DAY
127

1 Circle the contractions in each sentence.

It's careless to leave Blair's baseball where I'll trip on it!
We've never played so well and it's all because you're here!

A contraction combines 2 words with an apostrophe to replace the missing letters.

2 Sort the words by their spelling pattern.

scare

repair

chair

spare

-air

repair
chair

-are

scare
spare

3

glare

to look at someone
in an angry way

(verb)



What does **glare** have
to do with being mad at someone?

ANSWERS WILL VARY

**[If you're mad at
someone, you might
glare at them.]**

4 Finish the sentence with the
strongest synonym.

look

peek

stare

All I can do is

stare

at the screen!

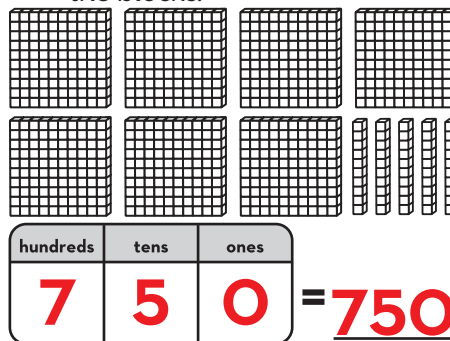
*Synonyms mean almost the same thing,
but some have a stronger meaning.*

5 Use 2 numbers in each group
to make 14.


$$14 = 6 + 7 + 7$$

$$14 = 5 + 9$$

6 Write the number shown by
the blocks.



7 Count by 5 to tell how many
minutes have passed.




40 minutes have passed
since the hour started.

8

There were 36 hares in the meadow. 12 hop away.
How many hares are still in the meadow?

24 hares are left
 $36 - 12 = 24$



0 or 00 minutes have passed
since the hour started.

Name: _____

DAY
128

1 Complete each sentence using a contraction.

CONTRACTIONS

he's	I'm
she's	you're
it's	that's

_____ the one we want.
ANSWERS WILL VARY
_____ not going to work.


2 Write the word that matches each picture.

care

hare

square

mare



hare

square

3

glare

to look at someone
in an angry way
(verb)



I **glared** at...

ANSWERS WILL VARY

**[a time when you
felt angry at someone]**

4

found

f o u n d

f o u n d

f o u n d

5 Solve.

$$7 + 7 = \underline{14} \quad 7 + 6 = \underline{13}$$

How is adding $7 + 7$ like
adding $7 + 6$?

ANSWERS WILL VARY

**[it's just one less, since 6 is
one less than 7]**

6 Write the numeral.

4 hundreds
6 tens
0 ones

460

8 hundreds
1 ten
3 ones

813

7 Draw 2 different trapezoids.
Circle the parallel sides.

**ANSWERS WILL
VARY**

examples:



Trapezoids are quadrilaterals with
one pair of parallel lines.

8

At school, 53 students have brown hair. 31 children have blonde hair.

How many fewer children have blonde hair than brown hair?

22 fewer have blonde hair

$$53 - 31 = \underline{22}$$



Name: _____

DAY
129

1 Rewrite the sentence correctly.

they wont cair if youre a little late

**They won't care if you're
a little late.**

2 Circle & write the word that has the same vowel sound as the picture.



blast
bank
crawl

blast



paint
chair
near

chair

3

glare

to look at someone
in an angry way

(verb)



What might make your teacher **glare**?

ANSWERS WILL VARY

4

(-er)

"a person who does something"

leader

base word

lead

suffix

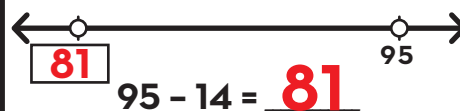
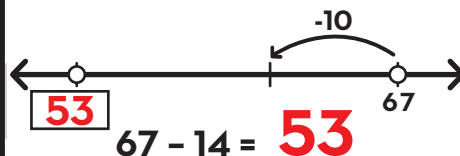
er

definition

a person who leads


5

Make jumps of tens and ones
to subtract 14.



6

Draw lines to pair up pictures.
Is it an even or odd amount?



4 is an **even** number.
even or odd


7

I drew a bunch of squares.
One square has 4 sides.
In all, I drew 20 sides.
How squares did I draw?


5 squares

**20 = 5 groups
of 4**

8 Draw the coins needed to pay for the item.



ANSWERS WILL VARY



Name: _____

DAY
130

1 Write a sentence telling something you'll do later. Use the contraction I'll. Circle the contraction.

ANSWERS WILL VARY

2 Write the 2 words that make up each contraction.

didn't = **did** + **not**

haven't = **have** + **not**

couldn't = **could** + **not**

A contraction combines 2 words with an apostrophe.

3 Draw a line to connect each word to the correct meaning.

askew

croon

coil

to use a soft, low
voice

to wind around
in circles

crooked; not straight

4 **stay**

s t a y

s t a y

s t a y

5 Solve.

$$65 - 13 = 52$$

$$3 + 5 = 8$$

$$17 + 40 = 57$$

$$20 + 5 + 25 = 50$$

6 Write the missing numbers.

200
part

300
part


500
whole

100
part

100
part

200
whole

7



There are **8** grapes
in a bunch.

There are **3** bunches
of grapes.

$$8 + 8 + 8 = 24$$

8

There are 28 chairs in the classroom. Most chairs are red, but 11 are blue.

How many of the chairs are red?

17 chairs are red

$$28 + 17 = 11$$



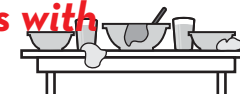
Name: _____

DAY
131


1 What are three things you notice about the sentence below?

We'd be nearly done cleaning if you'd cleared the table!

Answers will vary, but may include ideas such as: starts with a capital, ends with an exclamation, contractions, pronouns, past tense verb, adverbs etc.



2 Circle the correct spelling for each picture.



feer **fear** fere **spear** spere speer

fear



spear

3

smear

to spread
something in a
messy way

(verb)

She **smear**ed butter on
her bread.

What did she do with the butter?

**She spread the butter
in a messy way.**



4

since

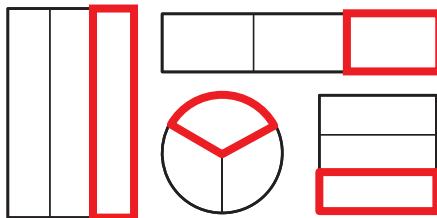
s i n c e

s i n c e

s i n c e

5

Draw the missing third of
each shape.



Thirds are three
equal parts of a whole.

6

201

2 hundreds **0** tens **1** one
200 + **0** + **1**











885

8 hundreds **8** tens **5** ones
800 + **80** + **5**

7

Use the pictograph to answer
the questions.

Slices of Watermelon Eaten

Alexis	    
David	  
Moira	 

KEY:

 = 1 slice

Moira ate the

fewest slices of watermelon.

6 slices of watermelon

were eaten by **Alexis**.

8

Captain Blackbeard has 27 chests of gold. He gets 33 more chests.

How many chests of gold does he have now?

60 chests of gold 27 + 33 = 60



Name: _____

DAY
132

1 Circle the 2 contractions in each sentence.

We'd be nearly done cleaning if you'd cleared the table!
If he's going to get the gum out of his beard, he'll have to trim it.

A contraction combines 2 words with an apostrophe to replace the missing letters.

2 Sort the words by their spelling pattern.

steer

cheer

clear

year

-ear

clear
year

-eer

steer
cheer

3

smear

to spread
something in a
messy way
(verb)



What does **smear** have
to do with fingerprinting?

ANSWERS WILL VARY
[You smear the paint
if you're fingerprinting.]

4 Use context clues to find the
meaning of the underlined word.

She peered into the
dark closet to find her
lost shoe.

Peered means _____.

☒ looked

☐ shouted

5 Write combinations of 15.

15	
5	10

$$\underline{15} - 5 = 10$$

$$15 - \underline{10} = 5$$

$$10 + \underline{5} = 15$$

15	
9	6

$$9 + \underline{6} = 15$$

$$15 - 6 = \underline{9}$$

$$\underline{15} - 9 = 6$$

6 Write the number in different
forms.


430 can be written as:

4 hundreds 3 tens


or 43 tens

or 430 ones


7 Tell the time.



The hour hand is
in the 4
o'clock space.



30 minutes
have passed since
the hour started.



The time is:
4 : 30

8

There were 51 deer in meadow. 22 of them ran over the hill.

How many deer are still in the meadow?

29 deer are still in the meadow
 $51 - 22 = 29$



Name: _____

DAY
133

1 Complete each sentence using a contraction with will.

CONTRACTIONS

I'll	we'll
you'll	they'll
she'll	it'll

_____ be here soon!
ANSWERS WILL VARY
_____ have no fear of it.

2 Write the word that matches each picture.

tear

hear

gear

year



hear

gear

3

smear

to spread
something in a
messy way
(verb)



On the walls, the children had **smeared**...

ANSWERS WILL VARY

**[paint, marker, jam,
chocolate, etc.]**

4

forgot

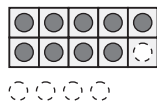
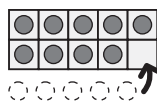
f o r g o t

f o r g o t

f o r g o t

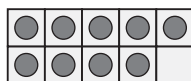
5 Make a 9 into a 10 to add.

9 + 5 is the same as 10 + 4



9 + 7 is the same as 10 + **16**

9 + 7 = **16**



6 Write the numeral.

1 hundred
2 tens
4 ones

124

8 hundreds
5 tens
0 ones

850

7 Trace the parallell sides on each parallelogram.

OPPOSITE PARALLEL SIDES:



Parallelograms are quadrilaterals
with opposite sides that are parallel
and the same length.

8

Grandma's red earrings cost \$55. Her gold earrings cost \$70.

How much less did she spend on the red earrings?

15 fewer dollars
\$70 - \$55 = \$15



Name: _____

DAY
134

1 Rewrite the sentence correctly.

Hes tried everything to cleer his ears!

**He's tried everything to
clear his ears!**

2 Circle & write the word that has the same vowel sound as the picture.



herd
trip
deer

deer



wheel
bread
great

wheel

3

smear

to spread
something in a
messy way
(verb)



What would you **smear** on your toast?

ANSWERS WILL VARY

4

(dis-)

"not" or "opposite of"

disconnect

prefix

base word

dis

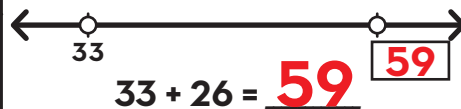
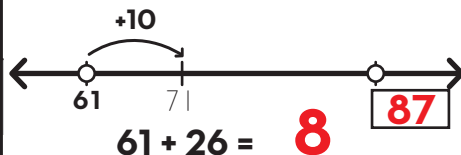
connect

definition

not connected

5

Make jumps of tens and ones
to add 26.



6

Use symbols to compare the
numbers.

38 **=** 38

76 **>** 67

> is greater than **<** is less than **=** is equal to

7

One person has 2 ears.
**How many people are here if
there are 20 ears?**

40 ears

**20 groups of
2 is 40.**

8 Draw coins to show 2 different ways to make 35¢.

35¢

ANSWERS WILL VARY

35¢



Name: _____

DAY
135

1 Write about something you're happy about. Use the contraction I'm. Circle the contractions.

ANSWERS WILL VARY

2 Form a contraction with the words.

she + will = **she'll**

you + will = **you'll**

that + will = **that'll**

A contraction combines 2 words with an apostrophe.

3 Draw a line to connect each word to the correct meaning.

glare

slight

coil

to wind around
in circles

to look at someone in
an angry way

very small

4 **move**

m o v e

m o v e

m o v e

5 Solve.

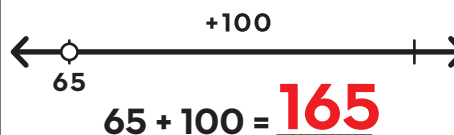
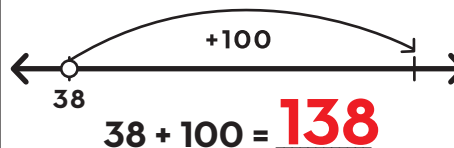
$$66 + 20 = 86$$

$$200 + 300 = 500$$

$$30 - 20 = 10$$

$$400 + 60 = 460$$

6 Draw arrows to add a hundred on the open number line.

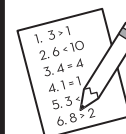


7 Ameera has 42 problems on her homework. So far she has finished 29 problems.
How many more problems does she need to solve?

13 problems

$$42 - 29 = 13$$

8 The toothpick is **2** inches long. The straw is **5** inches longer than the toothpick.



Name: _____

DAY
136


1 What are three things you notice about the sentence below?

I secretly ate a bite of Mel's cake, but I barely touched it!

Answers will vary, but may include ideas such as: it starts with a capital, it's an exclamation, possessive noun, past tense verbs, adverbs, etc.



2 Circle the correct spelling for each picture.



invit **invite** invight



wight wite **white**

invite

white

3


quite

very

(adverb)

It was springtime, but it felt **quite** hot outside.

How did it feel outside?



It feels very hot.

4

I've

I ' v e

I ' v e

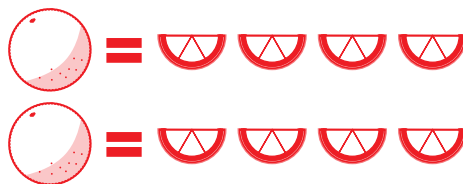
I ' v e

5

I need a fourth of an orange to make a snack.

How many snacks can I make with 2 whole oranges?

8 snacks



6

970

9 hundreds **7** tens **0** ones
900 + 70 + 0













43

0 hundreds **4** tens **3** ones
0 + 40 + 3


7

Use the pictograph to answer the questions.

Slices of Watermelon Eaten

Alexis	    
David	   
Moira	  

KEY:

 = 1 slice

David ate 2 fewer slices than Alexis.

Together, Alexis and Moira ate **9** slices of watermelon.

8

Mrs. Clive put 24 pink flamingos in her yard. Then she put out 18 more.

How many flamingos are in her yard now?

42 flamingos **24 + 18 = 42**

The wind blew down 10. How many flamingos are left?

32 flamingos **42 - 10 = 32**



Name: _____

DAY
137

1 Underline the 2 verbs in each sentence. Circle the adverbs that describe the verbs.

I secretly ate a bite of Mel's cake, but I barely touched it!
I invited him yesterday, but he politely said no.

Adverbs can describe verbs. They tell how, where, and when things happen.

2 Sort the words by their spelling pattern.

wire

drier

fire

pliers

-ier

drier
pliers

-ire

wire
fire

3

quite

very
(adverb)



What does it mean to do something **quite** well?

ANSWERS WILL VARY

[It means you do it very well.]

4 Finish the sentence with the strongest synonym.

gobble **chew** **bite**

I'm so hungry I'm going to

gobble

every crumb of bread!

Synonyms mean almost the same thing, but some have a stronger meaning.

5 Use 2 numbers in each group to make 15.

8 **7** **6**

$$15 = 8 + 7$$

9 **11** **4**

$$15 = 11 + 4$$

6 Write the number in different forms.


670 can be written as:

6 hundreds **7** tens


or **67** tens

or **670** ones

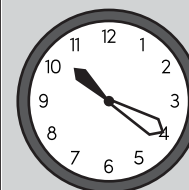
7 Tell the time.



The hour hand is in the **10** o'clock space.



20 minutes have passed since the hour started.



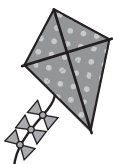
The time is: **10:20**

8

52 people are flying kites in the park. 23 of the people leave.

How many people are still flying kites?

29 people are still flying kites
52 - 23 = 29



Name: _____

DAY
138

1 Add an adverb to complete each sentence. Underline the verb each adverb describes.

ADVERBS that tell HOW

quickly	joyfully	easily
quietly	dimly	boldly
slowly	closely	wildly

The kite blew _____ in the breeze.

That white marker draws _____.
ANSWERS WILL VARY

2 Write the word that matches each picture.

white

spite

bite

write



bite

write

3

quite

very
(adverb)



I live **quite** near...

ANSWERS WILL VARY

4

their

t h e i r

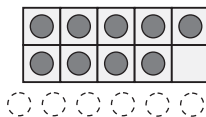
t h e i r

t h e i r

5 Make a 9 into a 10 to add.

9 + 6 is the same as 10 + **5**

9 + 6 = **15**



9 + 4 = **13**

10 + 3 = **13**

9 + 8 = **17**

10 + 7 = **17**

6 Write the numeral.

9 hundreds
1 ten
3 ones

913

7 hundreds
6 tens
2 ones

762

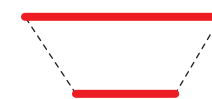
7 Trace the parallel sides.
Circle the shape's name.



trapezoid
parallelogram



trapezoid
parallelogram



trapezoid
parallelogram



trapezoid
parallelogram

Trapezoid = 1 pair of parallel sides
Parallelogram = 2 pairs of parallel sides

8 Tyshawn invited 45 people to the school play. Irelee invited 26 people.
How many more people did Tyshawn invite?

19 more people
45 - 26 = 19



Name: _____

DAY
139

1 Rewrite the sentence correctly.

quickly write her a letter and I'll mail it today

**Quickly write her a letter and
I'll mail it today.**

2 Circle & write the word that has the same vowel sound as the picture.



think
child
print

child



bird
their
crier

crier

3

quite

very

(adverb)



What might make you feel **quite** surprised?

ANSWERS WILL VARY

4

(-un)

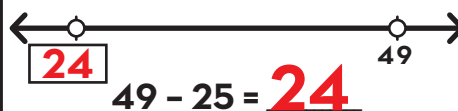
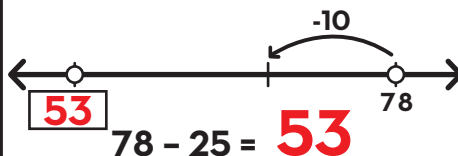
"not" or "to remove"

Are you **unhappy** if you get a present? Why or why not?

**No, people are usually happy with presents.
Unhappy means not happy.**

5

Make jumps of tens and ones to subtract 25.



6

Draw lines to pair up pictures. Is it an even or odd amount?



10 is an **even** number.
even or odd

7

I can eat a cracker in 4 bites. I ate 4 crackers.
How many bites did I take?

16 bites

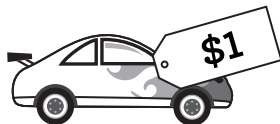
**4 + 4 + 4 + 4 =
16**

8

The car costs 1 dollar. I have 100 pennies.
Do I have enough to pay for the car?

yes

How do you know?



100 pennies is equal to 1 dollar



Name: _____

DAY
140

1 Write a sentence telling something you do happily. Circle the adverbs.

ANSWERS WILL VARY

2 Form a contraction with the words.

we + had = **we'd**

I + would = **I'd**

they + are = **they're**

A contraction combines 2 words with an apostrophe.

3 Draw a line to connect each word to the correct meaning.

ban

smear

glare

to say people can't
do something

to look at someone in
an angry way

to spread something
in a messy way

4 **always**

a l w a y s

a l w a y s

a l w a y s

5 Solve.

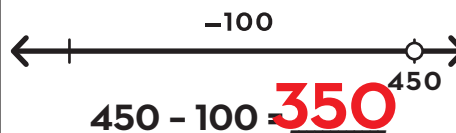
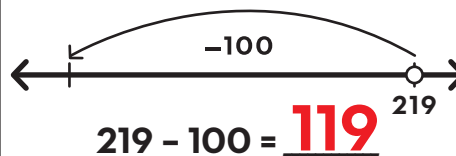
$$500 - 300 = 200$$

$$700 + 80 = 780$$


$$8 + 12 = 20$$

$$50 + 50 + 50 = 150$$

6 Draw arrows to add a hundred on the open number line.



7 Partition 12 starfish by circling groups of 6.



There are **2** groups
of 6 starfish.

8 There are 24 roses in the vase. 16 are red and the rest of the roses are white.

How many of the roses are white?

8 roses are white

$$16 + 8 = 24$$





>> Terms of Use <<

The original purchaser of this document is hereby granted permission to reproduce this document specifically for teaching purposes in a single classroom. If you are NOT the original purchaser, please download the item from my store on Teachers Pay Teachers before making any copies. Redistributing, editing, selling, or posting this item or any part thereof on the Internet is strictly prohibited without first gaining permission from the author. Violations are subject to the penalties of the Digital Millennium Copyright Act.

Please contact us if you wish to be granted special permission or if you have a question about the usage of this product.

>> Which Means? <<

You **CANNOT** copy this resource for others...
but you **CAN** tell them all about it!

You **CANNOT** put a copy of this resource online...
but you **CAN** link to the item in our store!

You **CANNOT** change or sell this resource...because, well, c'mon! It took a long time and a lot of effort for us to make it!

THANK YOU

FOR YOUR DOWNLOAD!



SHOP

Hello there! We are a set of sisters who are the brains behind the 'Second Story Window' brand. We are both former 2nd grade teachers and current preschool teachers with a combined 17 years experience in the classroom. We love to make life just a little easier for teachers by designing curriculum that is both rigorous and easy-to-use!

Emily & Heidi

TRANSFORM YOUR

Word Work INTO Word Play

- A COMPREHENSIVE PHONICS CURRICULUM -

Ready to take your word work to the next level?

CLICK THE BUTTON BELOW TO TRY OUT OUR PHONICS CURRICULUM... COMPLETELY FREE!

I WANT WORD PLAY!

